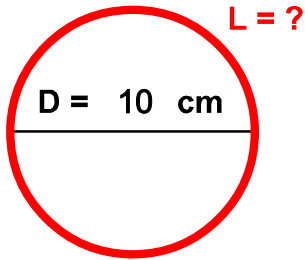


Nombre :

Fecha :

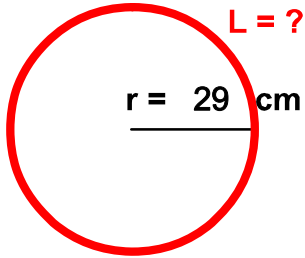
Calcula las longitudes:

1



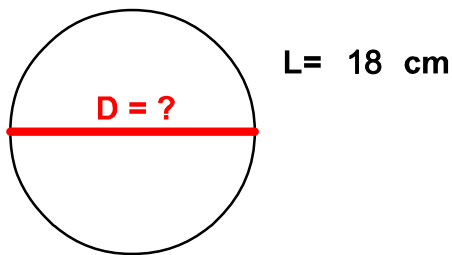
$L =$ cm

2



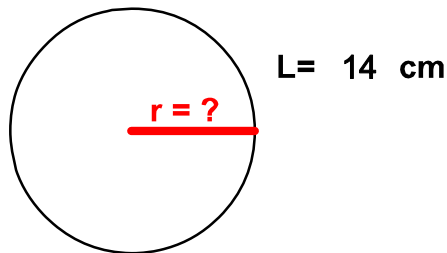
$L =$ cm

3



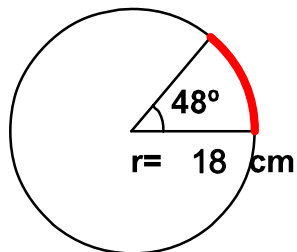
$D =$ cm

4



$r =$ cm

5



$La =$ cm

$\pi = 3,14$

$L = D \cdot \pi$

$L = 2 \cdot \pi \cdot r$

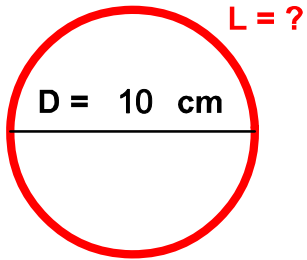
$La = \frac{2 \cdot \pi \cdot r \cdot 48}{360}$

1- 31.4 cm 2- 182.12 cm 3- 5.732484 cm 4- 2.229299 cm 5- 15.072 cm

Nombre: Fecha:

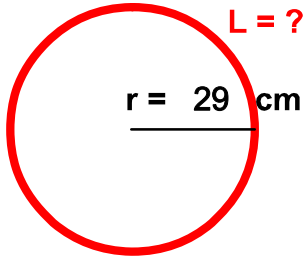
Calcula las longitudes:

1



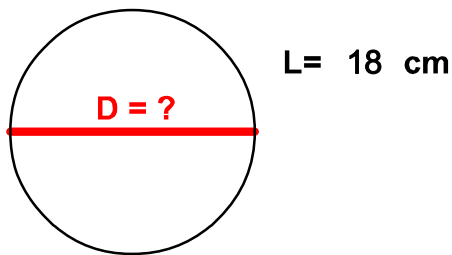
$L =$ cm

2



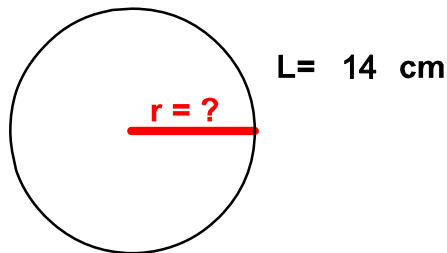
$L =$ cm

3



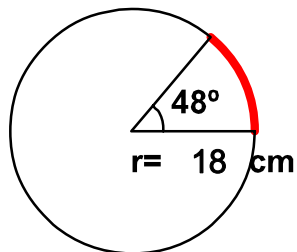
$D =$ cm

4



$r =$ cm

5



$La =$ cm

$\pi = 3,14$

$L = D \cdot \pi$

$L = 2 \cdot \pi \cdot r$

$La = \frac{2 \cdot \pi \cdot r \cdot 48}{360}$